


Year 4: Week 2, Day 3


Finding change

Each day covers one maths topic. It should take you about 1 hour or just a little more.


1. Start by reading through the **Learning Reminders**. They come from our *PowerPoint* slides.



2. Tackle the questions on the **Practice Sheet**. There might be a choice of either **Mild** (easier) or **Hot** (harder)! Check the answers.



3. Finding it tricky? That's OK... have a go with a grown-up at **A Bit Stuck?**



4. Have I mastered the topic? A few questions to **Check your understanding**. Fold the page to hide the answers!

Identify the value of the '4' in the following numbers:

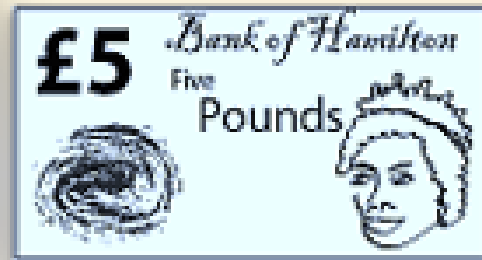
(a) 3.407
(b) 4.821
(c) 0.043
(d) 5.104
(e) 48,739

How many times must Dan multiply 0.048 by 10 to get 48,000?

What number is one hundred times smaller than 0.4?

Learning Reminders

Count up to find change from £5.




If you have £5 to spend and an item costs **£2.85**, how could you calculate the change?

Draw a line and mark **£2.85** on the left and **£5** on the right...

Frog knows that **85 + 15 = 100** so he jumps **15p** to £3...

... and then **£2** to £5.



So you would get **£2.15 change** from £5.

Learning Reminders

Count up to find change from £10.

This time you have
£10 and the item
costs **£5.48**.

Draw a line and mark
£5.48 on the left and
£10 on the right...

Frog's ready to
go!

How far to the
next pound?

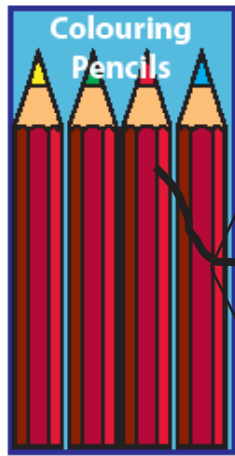
How much more to
£10?

How much change
this time?



Practice Sheet Mild

Finding change



Find the change from £5 for each of these six prices.

Challenge

I spend £2.42. Do I have enough money left to buy a notebook?

Practice Sheet Hot

Finding change



Find the change from £10 for each of these six prices.

Challenge

I use a £20 note and buy an item for £10.13. My change is £9.87 which has consecutive digits 9, 8, 7. Can you find other prices where my change from £20 would be a number with consecutive digits?

Practice Sheet Answers

Finding change (mild)

Colouring pencils: £5.00 - £3.79 = **£1.21**

Pad of paper: £5.00 - £2.68 = **£2.32**

Ticket 1: £5.00 - £2.85 = **£2.15**

Ticket 2: £5.00 - £3.39 = **£1.61**

Ticket 3: £5.00 - £1.78 = **£3.22**

Ticket 4: £5.00 - £2.22 = **£2.78**

Challenge

No. Spending £2.42 only leaves you £2.58, which is not enough for a notebook that costs £2.68.

Finding change (hot)

Paint set: £10.00 - £7.79 = **£2.21**

Brushes: £10.00 - £5.85 = **£4.15**

Ticket 1: £10.00 - £6.69 = **£3.31**

Ticket 2: £10.00 - £8.29 = **£1.71**

Ticket 3: £10.00 - £7.56 = **£2.44**

Ticket 4: £10.00 - £5.34 = **£4.66**

Challenge

£20 - £18.77 = £1.23

£20 - £15.44 = £4.56

£20 - £12.11 = £7.89

£20 - £14.57 = £5.43

£20 - £11.24 = £8.76

£20 - £7.66 = £12.34

£20 - £17.66 = £2.34

£20 - £14.33 = £5.67

£20 - £16.79 = £3.21

£20 - £13.46 = £6.54

£20 - £10.13 = £9.87

£20 - £16.55 = £3.45

£20 - £13.22 = £6.78

£20 - £15.68 = £4.32

£20 - £12.35 = £7.65

£20 - £17.90 = £2.10


A Bit Stuck?

Winter warmers

Work in pairs

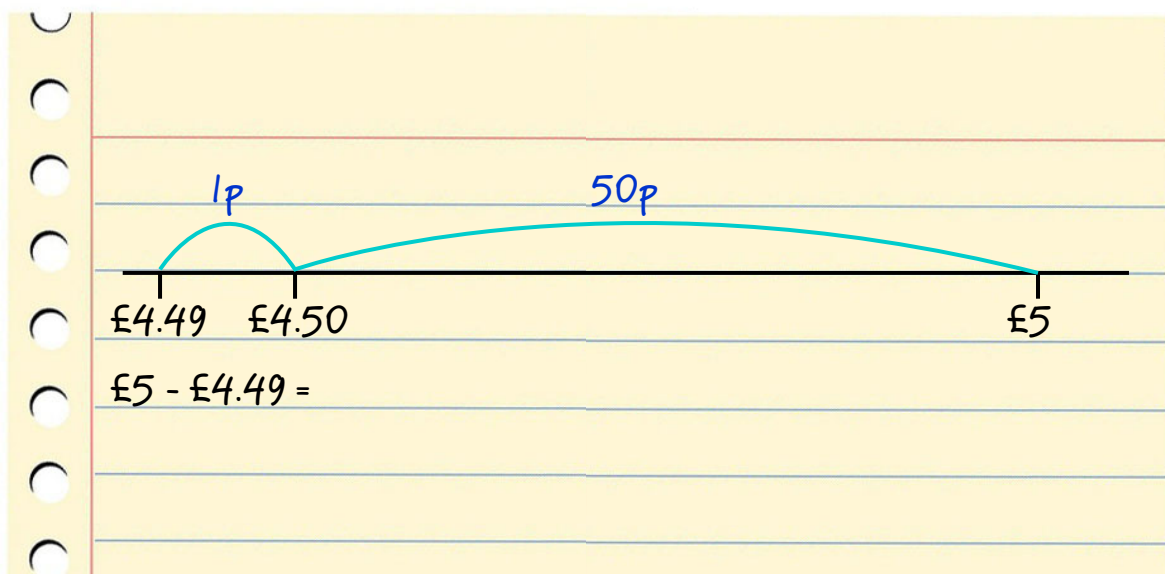
Things you will need:

- A pencil



What to do:

- Take it in turns to choose a hat or a beanie from the web page.
- Use Frog to find the change from £5.
- How many hats can you buy before you run out of time?



S-t-r-e-t-c-h:

Choose two hats and find the change from £10.

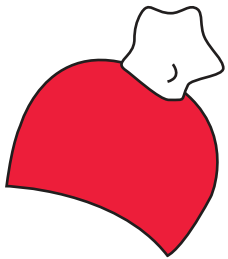
Learning outcomes:

- I can use Frog to find the change from £5 (answers less than £1).
- I am beginning to use Frog to find the change from £10.


[GO](#)[Your account](#)[Your basket](#)[Men's](#)[Women's](#)[Kid's](#)[Walking](#)[Running](#)[Climbing](#)[Camping](#)

Winter hats

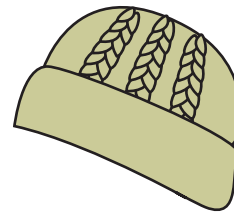
Wrap up and keep warm this winter with our latest range of winter hats.



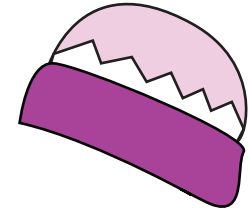
Red pom-pom
beanie
£4.49

[Add to basket](#)


Orange plain knit
beanie
£4.85

[Add to basket](#)


Khkai Aran knit
beanie
£4.63

[Add to basket](#)


Purple zig-zag
striped beanie
£4.75

[Add to basket](#)


Techno pattern double
pom-pom beanie
£4.25

[Add to basket](#)

Grey pom-pom
beanie
£4.37

[Add to basket](#)

Aztec knit
beanie
£4.59

[Add to basket](#)

Pale blue fluffy
pom-pom beanie
£4.46

[Add to basket](#)

Check your understanding

Questions

Tim buys a DVD. Frog finds the change from £10, saying it is £3.46. How much was the DVD?

Complete each diagram.

£10	
£6.83	

£5	
	£2.27

£10	
£3.58	

Fold here to hide answers

Check your understanding

Answers

Tim buys a DVD. Frog finds the change from £10, saying it is £3.46. How much was the DVD? **£6.54.**
 Frog jumps 4p, 50p and £6 from £3.46 – some may be able to use complements to 100 and combine the first 2 jumps.

Complete each diagram.

£10	
£6.83	£3.17

£5	
£2.73	£2.27

£10	
£3.58	£6.42